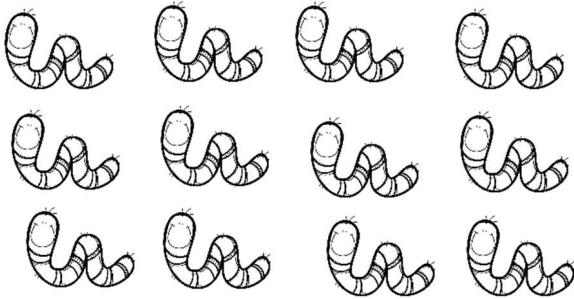
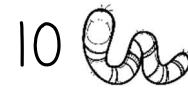


Name: \_\_\_\_\_

**Would You Rather? - I**Have the amount of worms  
below?**Or**Have two groups of ten  
worms?

Explain your choice below using words, pictures, equations,  
quick draws, numbers lines, or other strategies!

I would rather have \_\_\_\_\_


\_\_\_\_\_

\_\_\_\_\_


Name: \_\_\_\_\_

**Would You Rather? - 2**

Have 2 tens and 2 ones of ladybugs?



2 tens



2 ones

Or

10 + 10 + 10 = ? ladybugs?






Explain your choice below using words, pictures, equations, quick draws, numbers lines, or other strategies!

I would rather have \_\_\_\_\_

\_\_\_\_\_



\_\_\_\_\_

Name: \_\_\_\_\_

**Would You Rather? - 3**Have  $10 + 5 + 10$  spiders?

Or

25 - 5 spiders?



Explain your choice below using words, pictures, equations, quick draws, numbers lines, or other strategies!

I would rather have \_\_\_\_\_

\_\_\_\_\_

\_\_\_\_\_